




### Count from 0 in multiples of 4 and 8


**1** Fill in the missing numbers by counting on or back in **4**, each time.

a 

b 

**2** Now try to complete the missing numbers by counting on or back in **8**, each time.

a 

b 

**3** Look at the number square.

a Look at the number square and put **X** through any number which is a multiple of **4** and **O** around any number which is a multiple of **8**.



0	1	2	3	4	5	6	7	8	9
10	11	12	13	14	15	16	17	18	19
20	21	22	23	24	25	26	27	28	29
30	31	32	33	34	35	36	37	38	39
40	41	42	43	44	45	46	47	48	49
50	51	52	53	54	55	56	57	58	59
60	61	62	63	64	65	66	67	68	69
70	71	72	73	74	75	76	77	78	79
80	81	82	83	84	85	86	87	88	89
90	91	92	93	94	95	96	97	98	100

b What did you notice?

.....

.....